



NAME \_\_\_\_\_

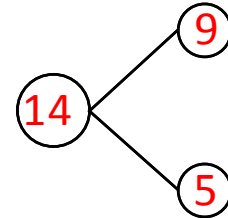
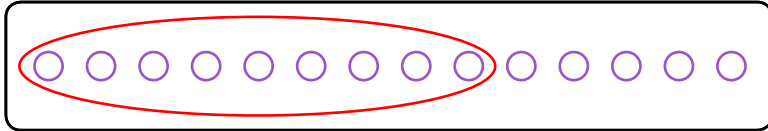
DATE \_\_\_\_\_

## SUBTRACTIONS (USING 9)

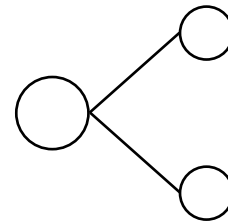
Draw and round 9. Solve and make a number bond.

Example:

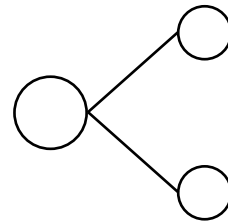
$$14 - 9 = \underline{5}$$



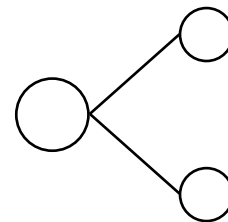
a)  $17 - 9 = \underline{\quad}$



b)  $11 - 9 = \underline{\quad}$



c)  $18 - 9 = \underline{\quad}$



d)  $14 - 9 = \underline{\quad}$

